

$$y = -2x + 5 \text{ and } x = 1$$

$$y = -2(1) + 5$$

$$y = -2 + 5$$

$$y = 3$$

$$\begin{aligned} & (3 \times y) - (2 \times y) \\ & (3 \times 3) - (2 \times 3) \\ & = 9 - 6 \\ & = 3 \end{aligned}$$

$$x = 4$$

$$\begin{aligned} 3x + 7 &= (3 \times x) + 7 \\ &= (3 \times 4) + 7 \\ &= 12 + 7 \\ &= 19 \end{aligned}$$

SUBSTITUTION

1. $P = 3n$
 $n = 6$

(a) Work out the value of P .

$$P = 3 \times 6 = 18$$

$$P = \underline{18} \dots \dots \dots (1)$$

$Q = 2c + d$
 $c = 3$
 $d = 2$

(b) Work out the value of Q .

$$Q = 2(3) + 2 = 8$$

$$Q = \underline{8} \dots \dots \dots (2)$$

(Total 3 marks)

2. $p = 5$
 $r = 2$

(a) Work out the value of

$$4p + 3r$$

$$4(5) + 3(2)$$

$$= 26$$

$$\underline{26} \dots \dots \dots (2)$$

n is an even number.

(b) What type of number is $n + 1$?

$$\underline{\text{odd}} \dots \dots \dots (1)$$

(Total 3 marks)

3. $y = 5x - 3$

Find the value of y when $x = 9$

$$y = 5(9) - 3$$
$$= 42$$

$$y = \dots 42 \dots$$

(2)

(Total 2 marks)

4. $P = 4k - 10$

$$k = 7$$

(a) Work out the value of P

$$P = 4(7) - 10$$
$$= 18$$

$$\dots 18 \dots$$

(2)

$$y = 4n - 3d$$

$$n = 2$$

$$d = 5$$

(b) Work out the value of y .

$$y = 4(2) - 3(5)$$
$$= 8 - 15 = -7$$

$$\dots -7 \dots$$

(2)

(Total 4 marks)

5. $v = u + 10t$

Work out the value of v when

$$u = 10 \text{ and } t = 7$$

$$v = 10 + 10(7) = 80$$

$$v = \dots 80 \dots$$

(Total 2 marks)

6.



Take **two** 5 ml spoons full
twice a day

You can work out the amount of medicine, c ml, to give to a child by using the formula

$$c = \frac{ma}{150}$$

m is the age of the child, in months.

a is an adult dose, in ml.

A child is 30 months old.

An adult's dose is 40 ml.

Work out the amount of medicine you can give to the child.

$$c = \frac{30 \times 40}{150} = 8$$

.....8..... ml

(Total 2 marks)

7. $V = 3b + 2b^2$

Find the value of V when $b = 4$

$$\begin{aligned} V &= 3(4) + 2(4)^2 \\ &= 12 + 32 \\ &= 44 \end{aligned}$$

.....44.....

(Total 2 marks)

8. (a) Work out the value of $3p + 4q$ when $p = 5$ and $q = -2$

$$3(5) + 4(-2)$$

$$= 15 - 8 \quad \dots\dots\dots 7 \dots\dots\dots$$

(2)

- (b) Given that $y = 4x - 3$, work out the value of x when $y = 11$

$$11 = 4x - 3$$

$$14 = 4x$$

$$x = 14/4 = 3.5 \quad x = \dots\dots\dots 3.5 \dots\dots\dots$$

(3)

(Total 5 marks)

9. Work out the value of $5x + 1$ when $x = -3$

$$5(-3) + 1 = -14$$

$$\dots\dots\dots -14 \dots\dots\dots$$

(2)

(Total 2 marks)

10. (a) Work out the value of $3x - 4y$ when $x = 3$ and $y = 2$

$$3(3) - 4(2)$$

$$= 9 - 8 \quad \dots\dots\dots 1 \dots\dots\dots$$

(2)

- (b) Work out the value of $\frac{p(q-3)}{4}$ when $p = 2$ and $q = -7$

$$\frac{2(-7-3)}{4} = -\frac{20}{4} = -5$$

$$\dots\dots\dots -5 \dots\dots\dots$$

(3)

(Total 5 marks)

11. $S = 2p + 3q$

$$p = -4$$

$$q = 5$$

(a) Work out the value of S .

$$\begin{aligned} S &= 2(-4) + 3(5) \\ &= -8 + 15 = 7 \end{aligned}$$

$$S = \dots 7 \dots \quad (2)$$

$$T = 2m + 30$$

$$T = 40$$

(b) Work out the value of m .

$$40 = 2m + 30$$

$$10 = 2m$$

$$m = 5$$

$$m = \dots 5 \dots \quad (2)$$

(Total 4 marks)

12. $A = 4bc$

$$A = 100$$

$$b = 2$$

Work out the value of c .

$$100 = 4 \times 2c$$

$$c = \frac{100}{8} = 12.5$$

$$c = \dots 12.5 \dots \quad (2)$$

(Total 2 marks)

13. (a) Work out the value of $2a + ay$ when $a = 5$ and $y = -3$

$$\begin{aligned} & 2(5) + 5(-3) \\ & = 10 - 15 \end{aligned}$$

$$\dots\dots\dots -5 \dots\dots\dots$$

(2)

(b) Work out the value of $5t^2 - 7$ when $t = 4$

$$\begin{aligned} & 5(4)^2 - 7 \\ & = 80 - 7 \\ & = 73 \end{aligned}$$

$$\dots\dots\dots 73 \dots\dots\dots$$

(3)

(Total 5 marks)

14. $A = \frac{h(x+10)}{2}$

$A = 27$

$h = 4$

Work out the value of x

$$27 = \frac{4(x+10)}{2}$$

$$x+10 = \frac{27}{2}$$

$$\begin{aligned} x &= 13.5 - 10 \\ &= 3.5 \end{aligned}$$

$$x = \dots\dots\dots 3.5 \dots\dots\dots$$

(Total 3 marks)

15. $h = 5t^2 + 2$

(i) Work out the value of h when $t = -2$

$$\begin{aligned}h &= 5(-2)^2 + 2 \\ &= 20 + 2 \\ &= 22\end{aligned}$$

..... 22
(3)

(ii) Work out a value of t when $h = 47$

$$\begin{aligned}47 &= 5t^2 + 2 \\ 5t^2 &= 45 \\ t^2 &= 9 \\ t &= \pm 3\end{aligned}$$

..... ± 3
(3)
(Total 5 marks)

16. $V = 3b + 2b^2$

Find the value of V when $b = -4$

$$\begin{aligned}V &= 3(-4) + 2(-4)^2 \\ &= -12 + 32 \\ &= 20\end{aligned}$$

..... 20
(Total 3 marks)

1 $f = 7$
 $g = 5$

Work out the value of $3f + 2g$

$$\begin{aligned} & 3(7) + 2(5) \\ &= 21 + 10 \\ &= 31 \end{aligned}$$

31

(Total for Question 1 is 2 marks)

2 $c = 4d - 7$

Find the value of c when $d = 6$

$$\begin{aligned} c &= 4(6) - 7 \\ &= 24 - 7 \\ &= 17 \end{aligned}$$

17

(Total for Question 2 is 2 marks)

3 $v = u + at$

$u = 3$
 $a = 10$
 $t = 6$

Work out the value of v .

$$\begin{aligned} v &= 3 + 10(6) \\ &= 63 \end{aligned}$$

$v =$ 63

(Total for Question 3 is 2 marks)

4 $x = 4$
 $y = 6$

Work out the value of $3x - y$

$$\begin{aligned} & 3(4) - 6 \\ &= 12 - 6 \\ &= 6 \end{aligned}$$

6

(Total for Question 4 is 2 marks)

5 $L = 9m + 2n$

Work out the value of L when $m = 3$ and $n = -6$

$$\begin{aligned} L &= 9(3) + 2(-6) \\ &= 27 - 12 \\ &= 15 \end{aligned}$$

15

(Total for Question 5 is 2 marks)

6 $q = 5p + 3r$

$$\begin{aligned} p &= 6 \\ r &= -4 \end{aligned}$$

Work out the value of q .

$$\begin{aligned} q &= 5(6) + 3(-4) \\ &= 30 - 12 \\ &= 18 \end{aligned}$$

18

(Total for Question 6 is 2 marks)

7 $H = 4f + g$

Work out the value of H when $f = 5$ and $g = -2$

$$H = 4(5) - 2 = 20 - 2 = 18$$

18

(Total for Question 7 is 2 marks)

8 $A = 4p + 5q$

$$\begin{aligned} p &= 3 \\ q &= -2 \end{aligned}$$

Work out the value of A .

$$\begin{aligned} A &= 4(3) + 5(-2) \\ &= 12 - 10 \\ &= 2 \end{aligned}$$

2

(Total for Question 8 is 2 marks)

9 $L = 9m + 2n$

Work out the value of L when $m = -3$ and $n = 4$

$$\begin{aligned} L &= 9(-3) + 2(4) \\ &= -27 + 8 \\ &= -19 \end{aligned}$$

-19

(Total for Question 9 is 2 marks)

10 $q = 6p - r$

$p = -4$
 $r = 5$

Work out the value of q .

$$\begin{aligned} q &= 6(-4) - 5 \\ &= -24 - 5 \\ &= -29 \end{aligned}$$

-29

(Total for Question 10 is 2 marks)

11 $H = f - 2g$

Work out the value of H when $f = 12$ and $g = -6$

$$\begin{aligned} H &= 12 - 2(-6) \\ &= 24 \end{aligned}$$

24

(Total for Question 11 is 2 marks)

12 $A = 5p + 6q$

$p = 10$
 $q = -2$

Work out the value of A .

$$\begin{aligned} A &= 5(10) + 6(-2) \\ &= 50 - 12 \\ &= 38 \end{aligned}$$

38

(Total for Question 12 is 2 marks)

13 $L = m(n - 2)$

Work out the value of L when $m = 9$ and $n = 5$

$$L = 9(5 - 2) = 27$$

27

(Total for Question 13 is 2 marks)

14 $a = 5bc$

$$b = -4$$

$$c = -3$$

Work out the value of a .

$$a = 5(-4)(-3) = 60$$

60

(Total for Question 14 is 2 marks)

15 $x = 4y^2 - 12$

Work out the value of x when $y = 5$

$$\begin{aligned} x &= 4(5)^2 - 12 \\ &= 100 - 12 \\ &= 88 \end{aligned}$$

88

(Total for Question 15 is 2 marks)

16 $A = p - 2q$

$$p = -4$$

$$q = -7$$

Work out the value of A .

$$\begin{aligned} A &= -4 - 2(-7) \\ &= -4 + 14 = 10 \end{aligned}$$

10

(Total for Question 16 is 2 marks)

17 $a = 8$
 $b = -5$
 $c = 2$

Work out the value of $b^2 - 4ac$

$$\begin{aligned} & (-5)^2 - 4(8)(2) \\ & = 25 - 64 \\ & = -39 \end{aligned}$$

-39

(Total for Question 17 is 2 marks)

18 $d = \frac{m}{v}$

Work out the value of d when $m = 32$ and $v = 8$

$$d = \frac{32}{8} = 4$$

4

(Total for Question 18 is 2 marks)

19 $A = 2j - jk$

Work out the value of A when $j = 7$ and $k = 3$

$$\begin{aligned} A & = 2(7) - 7(3) \\ & = 14 - 21 \\ & = -7 \end{aligned}$$

-7

(Total for Question 19 is 2 marks)

20 $w = 5x^2 + 3$

$x = -3$

Work out the value of w .

$$\begin{aligned} w & = 5(-3)^2 + 3 \\ & = 45 + 3 \\ & = 48 \end{aligned}$$

48

(Total for Question 20 is 2 marks)

21 $A = \frac{1}{2}bh$

Work out the value of A when $b = 3$ and $h = 8$

$$A = \frac{1}{2} (3)(8) = 12$$

12

(Total for Question 21 is 2 marks)

22 $A = \frac{1}{2}(a+b)h$

Work out the value of A when $a = 7$, $b = 6$ and $h = 10$

$$A = \frac{1}{2} (7+6)(10) \\ = 65$$

65

(Total for Question 22 is 2 marks)

23 $v = u + at$

Work out the value of v when $u = 12$, $a = -6$ and $t = 5$

$$v = 12 + (-6)(5) \\ = 12 - 30 \\ = -18$$

-18

(Total for Question 23 is 2 marks)

24 $y = mx + c$

$$m = -2$$

$$x = 12$$

$$c = -7$$

Work out the value of y .

$$y = -2(12) - 7 \\ = -24 - 7 = -31$$

-31

(Total for Question 24 is 2 marks)

25 $s = ut + \frac{1}{2}at^2$

$u = 3$

$a = 2$

$t = 4$

Work out the value of s .

$$\begin{aligned} s &= 3(4) + \frac{1}{2}(2)(4)^2 \\ &= 12 + 16 \\ &= 28 \end{aligned}$$

$s = 28$

(Total for Question 25 is 2 marks)

26 $s = ut + \frac{1}{2}at^2$

$u = -5$

$a = 4$

$t = 3$

Work out the value of s .

$$\begin{aligned} s &= -5(3) + \frac{1}{2}(4)(3)^2 \\ &= -15 + 18 \\ &= 3 \end{aligned}$$

$s = 3$

(Total for Question 26 is 2 marks)

27 $s = \frac{v^2 - u^2}{2a}$

$v = 7$

$u = 5$

$a = 3$

Work out the value of s .

$$\begin{aligned} s &= \frac{7^2 - 5^2}{2(3)} \\ &= \frac{49 - 25}{6} = \frac{24}{6} = 4 \end{aligned}$$

$s = 4$

(Total for Question 27 is 2 marks)

1. Find the value of $5c + 2$ if $c = 6$



$$5(6) + 2 = 32$$

32.....
(1)

2. Find the value of $4a - b$ when $a = 9$ and $b = 8$



$$\begin{aligned}4(9) - 8 \\= 36 - 8 \\= 28\end{aligned}$$

28.....
(2)

3. Find the value of $12h + 9t$ when $h = 11$ and $t = 3$



$$\begin{aligned}12(11) + 9(3) \\= 132 + 27 \\= 159\end{aligned}$$

159.....
(2)

4. Circle the expression that has the greatest value when $y = 10$



$2y$	$31 - y$	$y + 9$	$\frac{y}{2}$
20	21	19	5

The Maths Society (1)

5. If $x = 6$ and $y = -2$, find the value of



(a) x^2

$$\underline{\quad 36 \quad} \quad (1)$$

(b) $5x + y$

$$\begin{aligned} 5(6) - 2 \\ = 28 \end{aligned}$$

$$\underline{\quad 28 \quad} \quad (1)$$

(c) $x + y^2$

$$6 + 4 = 10$$

$$\underline{\quad 10 \quad} \quad (1)$$

(d) $\frac{y + 20}{x}$

$$\frac{-2 + 20}{6} = 3$$

$$\underline{\quad 3 \quad} \quad (2)$$

6. $P = 2W + 2L$



Find P if $W = 3$ and $L = 9$

$$P = 2(3) + 2(9)$$

$$\begin{aligned} = 6 + 18 \\ = 24 \end{aligned}$$

$$\underline{\quad 24 \quad} \quad (2)$$

The Maths Society

7. You are given that $m = 0.5$, $p = 0.75$ and $c = 2.2$



Find the value of

(a) $3c + m$

$$3(2.2) + 0.5$$

$$= 6.6 + 0.5$$

$$= 7.1$$

$$\underline{\underline{7.1}} \quad (2)$$

(b) $m + p + c$

$$0.5 + 0.75 + 2.2$$

$$= 1.25 + 2.2$$

$$= 3.45$$

$$\underline{\underline{3.45}} \quad (1)$$

8. The cost of hiring a hot tub is found using the formula



Hire cost = £50 plus an extra £45 per day

(a) Work out the hire cost for hiring the hot tub for 21 days.

$$50 + 45 \times 21$$

$$\underline{\underline{£995}} \quad (2)$$

Alex hires the hot tub for a number of days and the cost is £545

(b) How many days did Alex hire the hot tub?

$$\text{Hire} = 50 + 45 \times d$$

$$545 = 50 + 45d$$

$$d = 11 \text{ days}$$

$$\underline{\underline{\hspace{2cm}}} \quad (2)$$

The Maths Society

9. This formula can be used to convert between Celsius (C) and Fahrenheit (F).



$$F = 1.8C + 32$$

- (a) Convert 2°C into Fahrenheit

$$F = 35.6$$

.....
(2)

- (b) Convert 50°F into Celsius

$$\frac{50 - 32}{1.8} = C$$

$$C = 10$$

.....
(2)

10. Given that $a = 4$, $b = 9$ and $c = -5$



Work out the value of

$$\frac{ab + 24}{2c}$$

$$\frac{4 \times 9 + 24}{-10} = -6$$

.....
The Maths Society (3)

11. (a) Find the value of $5(a + c)$ when $a = 4$ and $c = 9$



$$5(4+9)$$

$$65$$

.....
(2)

- (b) Find the value of $7x + 2y$ when $x = 2$ and $y = -9$

$$14 - 18$$

$$-4$$

.....
(2)

-
12. $P = 2W + 2L$



Find W if $P = 30$ and $L = 11$

$$30 = 2W + 22$$

$$2W = 8$$

$$W = 4$$

.....
(2)

-
13. $y = w - 2a^2$



$$w = 400$$

$$a = 5$$

Work out the value of y

$$y = 400 - 50$$

$$= 350$$

.....
(2)

The Maths Society

14. The cost in pounds, C , of hiring a car is given by
 $C = 25d + 45$



where d is the number of days the car is hired.

- (a) Find C if $d = 4$

$$\begin{aligned} C &= 100 + 45 \\ &= 145 \end{aligned}$$

.....
(2)

- (b) Find d if $C = 245$

$$\begin{aligned} 245 &= 25d + 45 \\ 200 &= 25d \\ d &= 8 \end{aligned}$$

.....
(2)

15. $W = 2x + 5y$



- (a) Work out the value of W when $x = 8$ and $y = -3$

$$\begin{aligned} W &= 16 - 15 \\ &= 1 \end{aligned}$$

.....
(2)

- (b) Work out the value of x when $W = 59$ and $y = 7$

$$\begin{aligned} 59 &= 2x + 35 \\ 2x &= 24 \\ x &= 12 \end{aligned}$$

.....
(2)

The Maths Society

16. The amount of medicine, s ml, to give to a puppy, up to 18 months old, can be worked out using the formula.



$$s = \frac{am}{18}$$

s is the amount of medicine, in ml.

a is the dose for an adult dog, in ml.


m is the age of the puppy, in months.

A puppy is 3 months old.

An adult dog's dose is 45ml.

Work out the amount of medicine the puppy should be given.

$$s = \frac{45 \times 3}{18} = 7.5$$



.....ml
(3)

- 17.



$$m = abc$$

Find m if $a = 3$, $b = -8$ and $c = 2$

$$\begin{aligned} m &= 3 \times -8 \times 2 \\ &= -48 \end{aligned}$$

.....
The Maths Society (2)

18. Heidi is a plumber.
She uses this formula to work out the cost to charge her customers.



$$C = 40h + p + 0.5d$$

C is the total cost of the job, in pounds.
h is the number of hours worked.
p is the cost of any parts used, in pounds.
d is the distance travelled, in miles.

Heidi's last job took 3 hours and the cost of the parts used was £17.50
The total cost of the job was £156

Work out how far Heidi travelled in miles.

$$156 = 120 + 17.5 + 0.5d$$
$$18.5 = 0.5d$$
$$d = 37$$

The Maths Society

.....miles
(3)

19. $x + 3 = 10$



Work out the value of $\frac{5x - 3}{4}$

$$x = 7$$

$$\frac{5 \times 7 - 3}{4} = \frac{35 - 3}{4} = \frac{32}{4} = 8$$

.....
The Maths Society (2)

20. $v = u + at$



(a) Work out v when $u = 23$, $a = 4$ and $t = 3$

$$\begin{aligned}v &= 23 + 12 \\ &= 35\end{aligned}$$

.....
(2)

(b) Work out u when $v = 30$, $a = 2$ and $t = 8$

$$\begin{aligned}u &= 30 - 16 \\ &= 14\end{aligned}$$

.....
(2)

(c) Work out t when $v = 40$, $u = 12$ and $a = 4$

$$\frac{v-u}{a} = \frac{40-12}{4} = 7$$

.....
(2)

21. $2x - y = 17$
 $\quad \quad \quad \times 3$



(a) Work out the value of $6x - 3y$

$$6x - 3y = 51$$

.....
(2)

(b) Work out the value of $y - 2x$

$$y - 2x = -17$$

.....
(1)

The Maths Society

22. $y = 7x^2$




Explain what happens to the value of y when the value of x doubles.

times 4 $y = 7 \times (4x^2)$

(2)

23. $y = \frac{800}{x^3}$



Explain what happens to the value of y when the value of x doubles.

$y = \frac{800}{(8x^3)}$

(2)

24. Calculate the value of $x^y - y^x$



when $x = 3$ and $y = 6$

$$3^6 - 6^3 = 513$$

The Maths Society (2)

25. $80 = 2mn$



m and n are negative integers.

Write down a pair of possible values for m and n.

$$mn = 40$$

$$-8 \times -5$$

$$-4 \times -10$$

$$-2 \times -20$$


m = and n =
(2)

26. $y = (x - 5)(x + 1)$



Find y if $x = -3$

$$y = -8 \times -2$$
$$= 16$$



.....
(2)

27. $w = \frac{x}{2y}$



$$4w + 3y = 30$$

Work out the value of x when $y = 4$

$$4w = 30 - 3y$$


$$4 \times \frac{x}{2y} = 30 - 3y$$

$$\frac{4x}{2y} = 30 - 3y$$

$$\frac{4x}{8} = 30 - 12$$

$$4x = 144$$

$$x = 36$$



.....
(3)